

Parents,

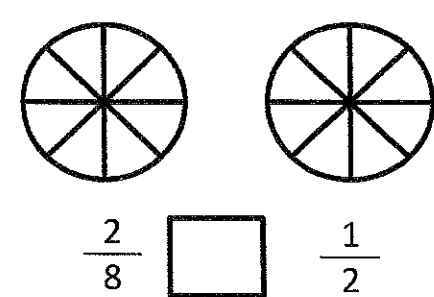
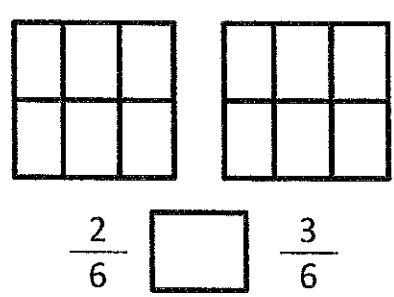
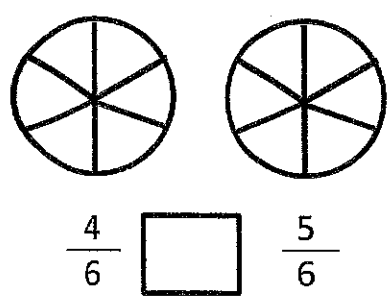
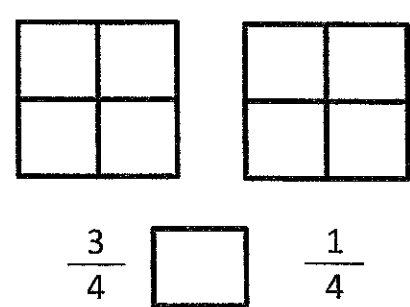
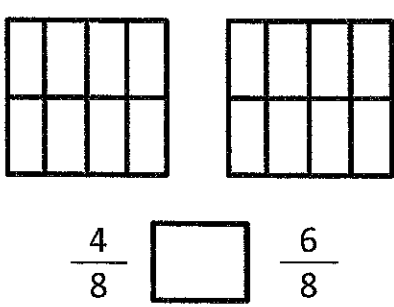
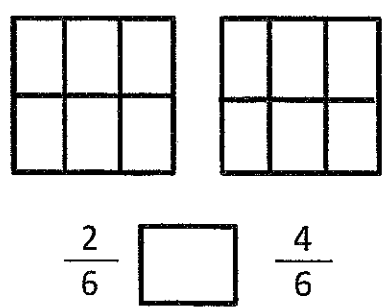
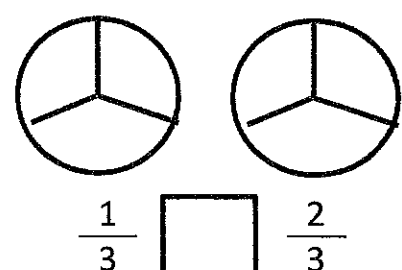
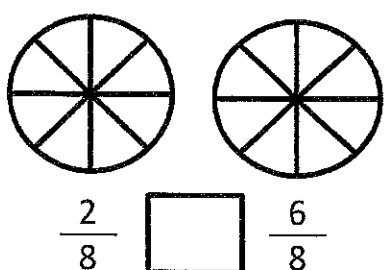
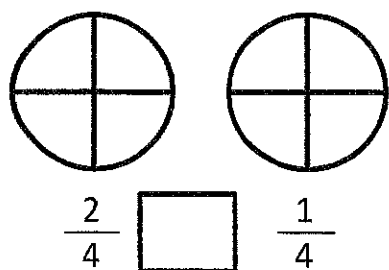
Due to our last snow day, we will have a fourth virtual day on March 24th, while teachers have the already scheduled professional development day. This packet includes the lessons your child needs to complete for class. Please return the completed packet to the school on Tuesday.

Virtual Day 4

March 24th

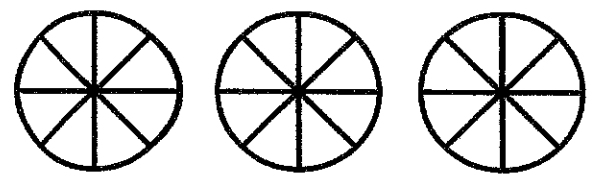
Name _____ # _____ Date _____

Shade in the fraction shown, then write use $>$, $<$, or $=$ to compare the two fractions.



Put these fractions in order: $\frac{4}{8}$ $\frac{2}{8}$ $\frac{7}{8}$

Use the circles to help you!





Working with Division Facts

The answers are mixed up at the bottom of the page. Cross out the answers as you complete the problems.

1 $40 \div 4 =$ _____

2 $18 \div 3 =$ _____

3 $24 \div 4 =$ _____

4 $24 \div 8 =$ _____

5 $14 \div 2 =$ _____

6 $40 \div 8 =$ _____

7 $42 \div 7 =$ _____

8 $64 \div 8 =$ _____

9 $32 \div 8 =$ _____

10 $56 \div 8 =$ _____

11 $27 \div 9 =$ _____

12 $28 \div 7 =$ _____

13 $72 \div 8 =$ _____

14 $90 \div 9 =$ _____

15 $54 \div 9 =$ _____

16 $48 \div 8 =$ _____

17 $49 \div 7 =$ _____

18 $27 \div 3 =$ _____

Answers:

4

4

9

6

7

10

5

10

3

3

6

7

8

6

6

7

6

9

Name: _____

Date: _____

Oh, That White Cottontail!

With the arrival of spring comes warmer weather, longer days, and many animal sightings. It is fun to spot springtime animals outdoors. Since the Eastern cottontail rabbit is the most common rabbit in the United States, chances are you will see one hop your way this spring.

There are many species of cottontail rabbits, but the most common is the Eastern cottontail rabbit. These **mammals** can be spotted from Canada to South America and across the United States. Cottontails like to live in open spaces like fields, meadows, and farms. The perfect home for rabbits would include shrubs to hide from their many **predators** if needed.

Cottontail rabbits are prey to many common animals. These rabbits are hunted by owls, dogs, bobcats, and even people like farmers. Luckily, these rabbits have large back feet that help them leap up to 15 feet away, helping them escape predators. Rabbits run quickly. A rabbit can run up to 18 mph. When faced with danger, rabbits run away in a zig-zag pattern. Rabbits run this way to prevent leaving behind a scent trail for their predators. This is a clever way to escape danger quickly.

Rabbits eat grass and garden plants such as berries, peas, and lettuce. Rabbits leave their burrows at dawn and dusk hours to eat, making them **crepuscular** animals.



Glossary

crepuscular - animals that are active at twilight

mammals - warm blooded animals with vertebrae and hair who give birth to live offspring

predator - an animal that preys on another animal

Name: _____

Date: _____

Oh, That White Cottontail!

Are you wondering how to know if you have spotted a cottontail rabbit? These rabbits are easily recognizable. This woodland creature has ears that stand up tall, large hind feet, and an unmistakable fluffy white tail. Cottontail rabbits can grow up to 19 inches long and weigh up to five pounds. These quiet creatures are not very social and tend to live alone in areas above ground that are densely covered with brush. However, the European cottontail rabbits live in warrens. A warren is a group of underground rabbit tunnels. These tunnels make it easy for rabbits to communicate and be social with other rabbits.

The next time you see a rabbit hop your way, be sure to check him out carefully as he hops away. If you spot that cute little cottontail, then it just might be an Eastern cottontail rabbit.

Respond to the questions below using complete and detailed sentences.

1. Where do Eastern cottontail rabbits like to make their homes?

2. Why do you think that farmers do not like rabbits living on their farms? Explain.

Oh, That White Cottontail!

Read each statement. Then decide if each statement is a fact or an opinion. Place a check under "fact" if the statement is a fact or place it under "opinion" if it is an opinion.

Fact

Opinion

The perfect home for rabbits would include shrubs so that they can hide from their many predators if needed.		
These rabbits are hunted by owls, dogs, bobcats, and even people like farmers.		
Rabbits eat grass and garden plants such as berries, peas, and lettuce.		
It is fun to spot springtime animals outdoors.		
These quiet creatures are very affectionate.		

Independent Practice

For numbers 1–5, read each sentence. Then choose the correct meaning of each underlined word.

- 1** Follow these useful safety tips.
- A without use
 - B not used
 - C having use
 - D before using
- 2** Don't be careless when you carry something hot.
- A without care
 - B full of care
 - C able to care
 - D having care
- 3** Let adults preview movies you want to see.
- A not view
 - B view without you
 - C mostly view
 - D view before
- 4** Never unbuckle your seatbelt while in a moving car.
- A buckle before
 - B do the opposite of buckle
 - C without a buckle
 - D full of buckles
- 5** You will find these safety tips are easily doable.
- A able to be done
 - B not done
 - C having done
 - D mostly done

Name: _____

Monday



Past, present, or future?

1. I'm going to the beach. _____

2. He will call you when he gets home. _____

Correct these sentences.

3. joey weared suspenders and know belt to church

4. ryan he like to watch the evening news from 600 until 630

Which is the correct abbreviation for "doctor"?

5. dr.

Doc.

Dr

Dr.

Name: _____

Tuesday



Correct these sentences.

1. charles barkley and michael jordan is my favorite basketball players

2. jan catched to lizards to keep as pets

Which word would come last in alphabetical order?

3. newspaper

newlywed

now

newt

How many syllables are in each word?

4. company _____

5. thoughtful _____

Name: _____

Monday



Past, present, or future?

1. I'm going to the beach. _____

2. He will call you when he gets home. _____

Correct these sentences.

3. joey weared suspenders and know belt to church

4. ryan he like to watch the evening news from 600 until 630

Which is the correct abbreviation for "doctor"?

5. dr.

Doc.

Dr

Dr.

Name: _____

Tuesday



Correct these sentences.

1. charles barkley and michael jordan is my favorite basketball players

2. jan caught to lizards to keep as pets

Which word would come last in alphabetical order?

3. newspaper

newlywed

now

newt

How many syllables are in each word?

4. company _____




5. thoughtful _____

Name: _____



Date: _____

FORCE, MOTION AND ENERGY

1. Which of the following shows pulling? Circle one



2. Put an X on all the objects that do NOT roll.



3. Circle each item that can be pulled with a magnet

- a. metal paper clip
- b. ball
- c. metal staples
- d. pencil

4. A magnet could be used to sort

- a. books and papers
- b. markers and crayons
- c. metal rods and metal nails
- d. toilet paper

5. What tool can you use to measure the distance you throw a ball.

- a. balance
- b. thermometer
- c. lengths of string

6. Alex placed a stick of butter in a pan on the stove. If he increases the heat energy on the stove, what will happen to the butter? _____

7. What do objects have inside of them that allow them to stick to the refrigerator?

- a. a magnet
- b. a thumbtack
- c. plastic

8. Tornados _____

- a. roll
- b. slide
- c. spin


9. If you look at an object in your room when the lights are on and it is sunny outside, it looks bright. When the sun goes down, and a light is turned off, how does the object look?

- a. It looks brighter
- b. It looks the same
- c. It looks less bright

Square Challenge

NAME: _____ CLASS: _____


Use the provided squares as a base to create as many square objects as you can think of! Your design can extend out past the square edges.




House

















Present



Picture Frame



Book



Guidance Virtual Day Lesson

Zones of Regulation

Ms. McNamara

emcnamara@southwestvalley.org

Instructions:

For this assignment you will need to fill out each of the six sections of the flower. You may color on the flower if you would like to. Make sure you answer each question from each petal of the flower and that you are using examples from the correct zone of regulation. Use the zone explanations from below if needed, but try your best to use only your memory and practice your knowledge of the zones.

As a reminder, here is the list of each zone.

Green Zone- Happy, Content, Calm, and normal levels of emotions.

Blue Zone- Sad, Sick, Bored, and low state of alertness or responding.

Yellow Zone- Excited, Silly, Nervous, Scared, and a heightened state of alertness.

Red Zone- Angry, Frustrated, Out of control, and an extremely heightened state of alertness.

A time I was in the
green zone was
when

When I'm
upset I like to

A time I was in the blue
zone was when

Name

A time I was in
the red zone was
when

A time I was in
the yellow zone
was when